





Multiplication sentences and arrays

Grade 3 Multiplication Worksheet

Write a multiplication equation to find the number of shapes.



$$\square \times \square = \square$$




$$\square \times \square = \square$$




$$\square \times \square = \square$$



$$\square \times \square = \square$$



$$\square \times \square = \square$$




$$\square \times \square = \square$$



Multiplication sentences and arrays


Grade 3 Multiplication Worksheet

Write a multiplication equation to find the number of shapes.



$$4 \times 3 = 12 \text{ or;}$$

$$3 \times 4 = 12$$



$$3 \times 5 = 15 \text{ or;}$$

$$5 \times 3 = 15$$



$$2 \times 4 = 8 \text{ or;}$$

$$4 \times 2 = 8$$




$$4 \times 6 = 24 \text{ or;}$$

$$6 \times 4 = 24$$



$$2 \times 3 = 6 \text{ or;}$$

$$3 \times 2 = 6$$



$$4 \times 5 = 20 \text{ or;}$$

$$5 \times 4 = 20$$